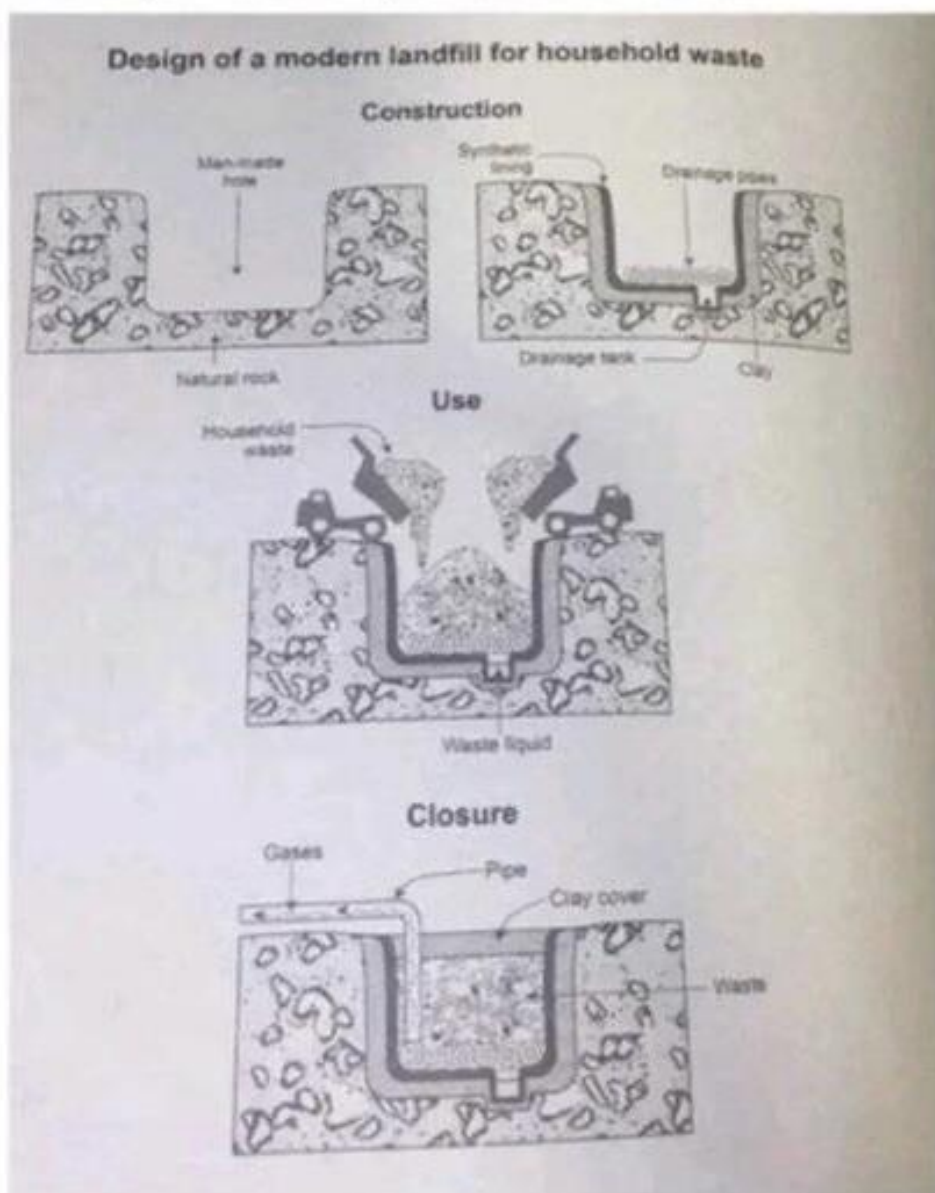


Đề thi Writing (Paper – Based) 2024 Quý 2 (5-8)

Đề 1

Task 1: The diagram below shows how a modern landfill for household waste is designed. Summarize the information by selecting and reporting the main features, and make comparisons where relevant.

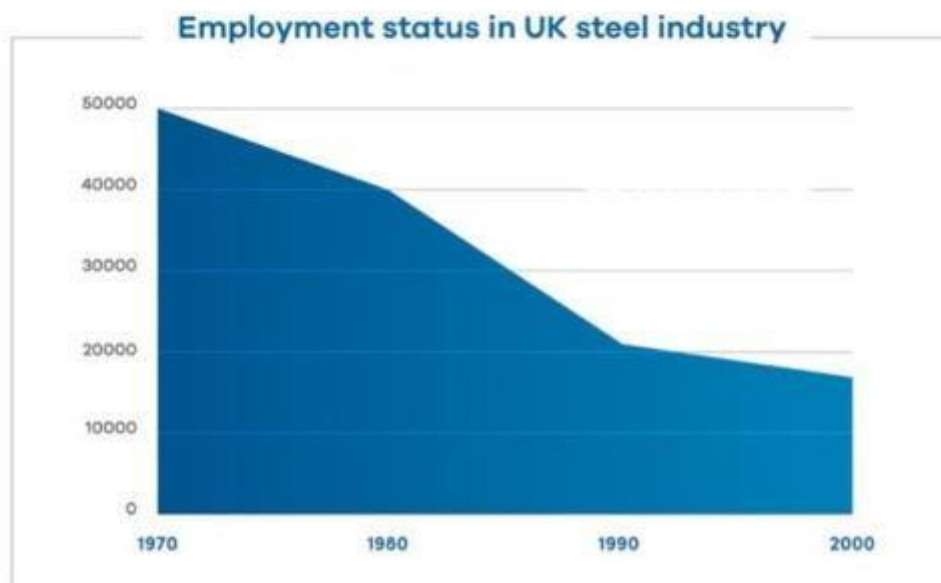
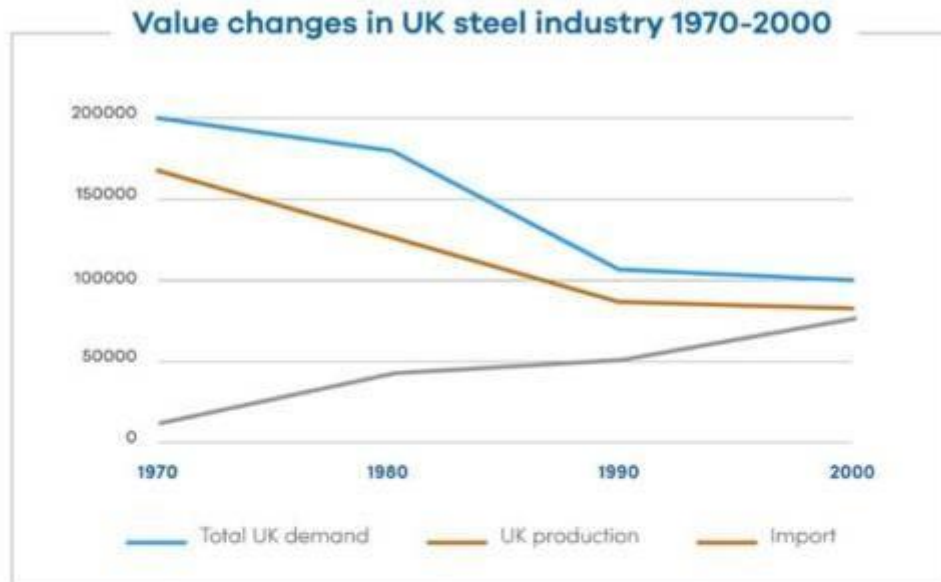


Task 2

The research indicates that nowadays some consumers are less influenced by advertising than in the past. What are the reasons and is it a positive or negative development?

Đề 2

The graphs show the changes in the UK industry steel between 1970 and 2000. (million tonnes vs thousand). Summarize the information by selecting and reporting the main features, and make comparisons where relevant.

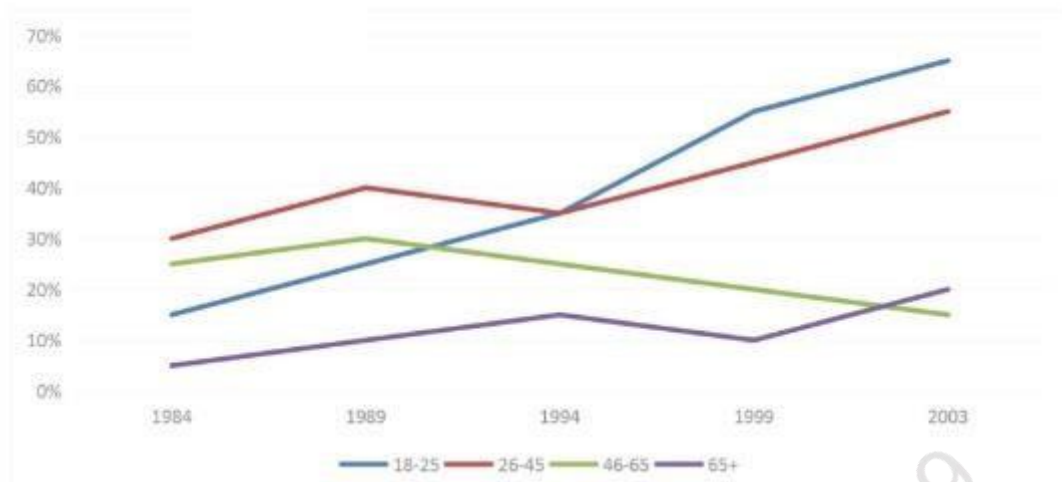


Task 2: Some ex-prisoners commit crimes after being released from the prison. What do you think is the cause? How can it be solved?

Đề 3

Task 1

The graph below shows the percentage of people visiting GYM once a month or more between 1984 to 2003.

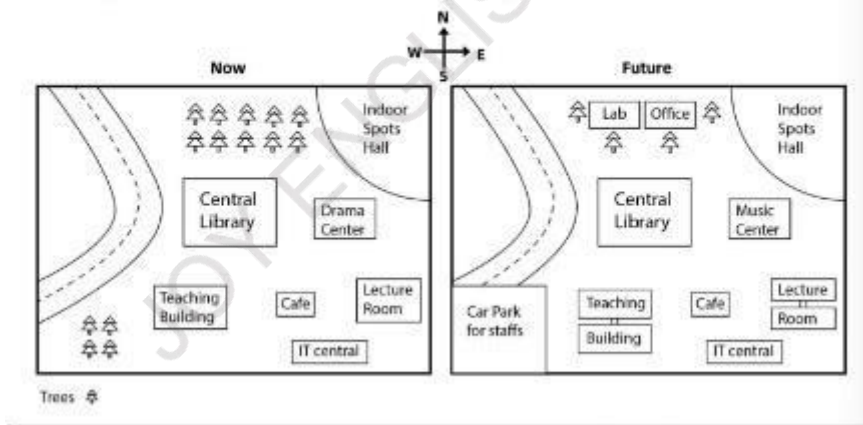


Task 2: The organized tours to remote places and communities are more popular. Is it a positive or negative improvement for the local people and the environment?

Đề 4:

Task 1

The maps below show the future plan about the Biology School in a particular university

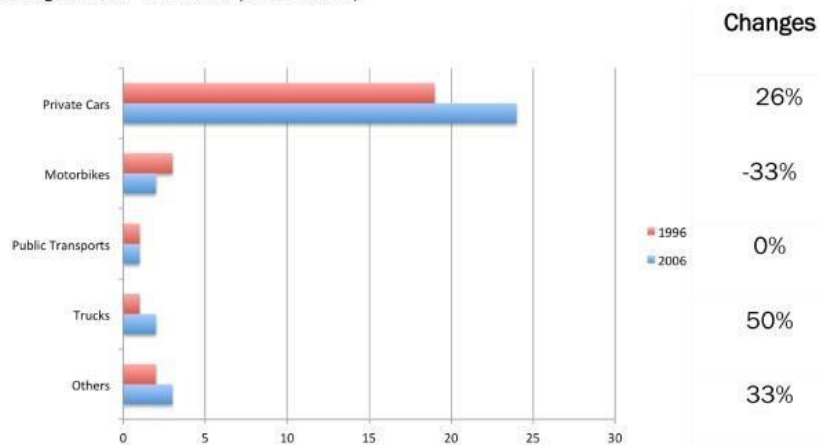


Task 2: Some people think that people should be given the right to use fresh water as they like. Others believe governments should control toughly over the use of fresh water. Discuss both view and give your own opinion.

Đề 5

The chart below shows the number of different types of vehicles registered in European use from 1996 to 2006.

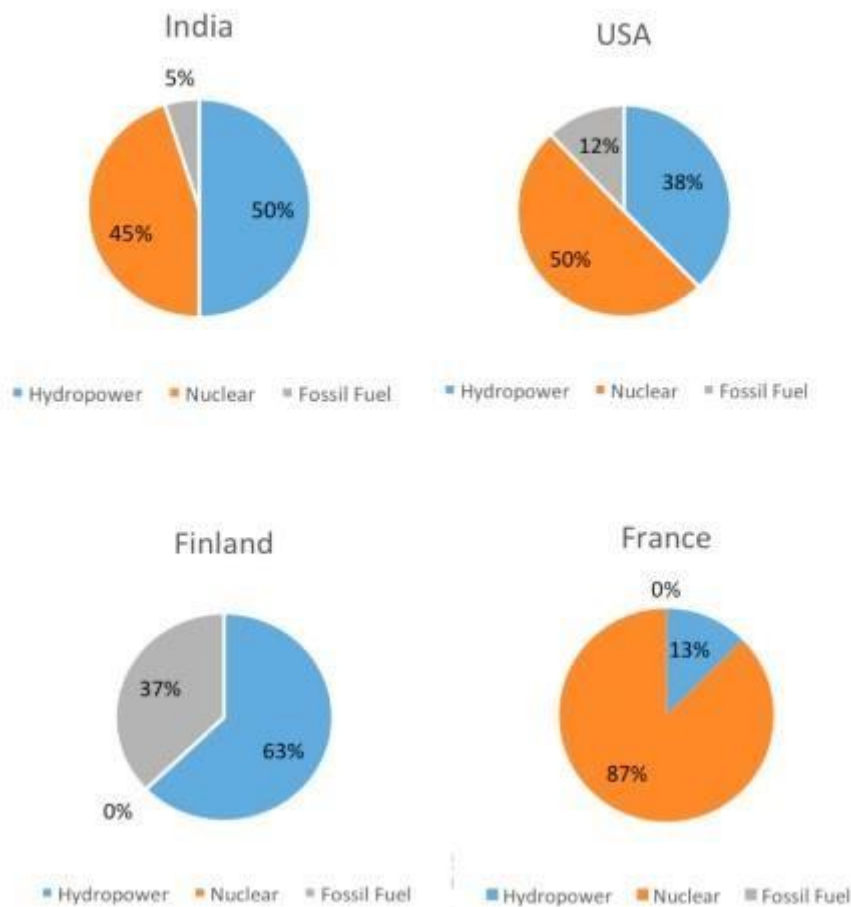
The Numbers of Registered Vehicles (in millions)



Task 2: Large companies should pay higher salaries to CEOs and executives, compared to other workers. To what extent do you agree or disagree?

Dê 6

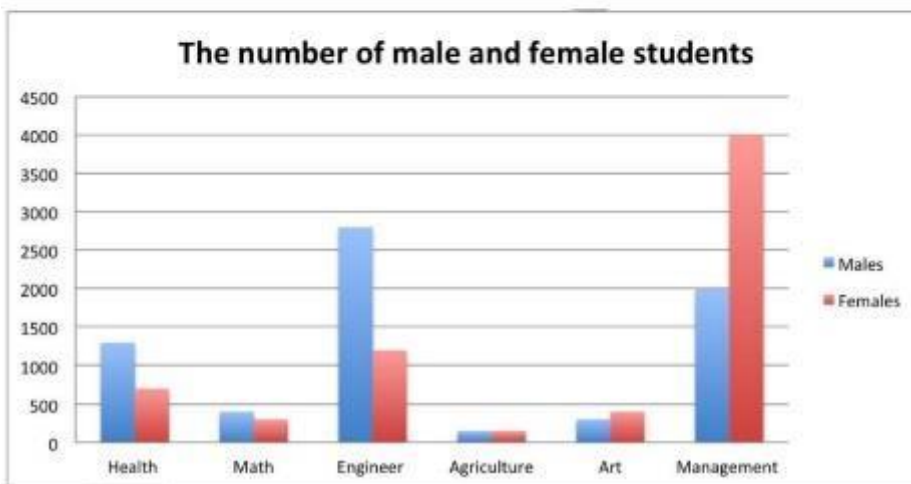
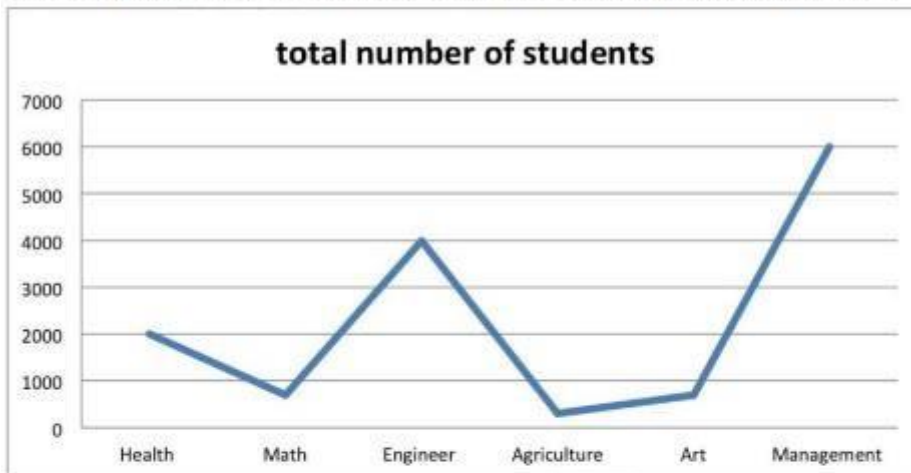
The charts below show the source of electricity produced in four different countries in 2020.



Task 2: Some people think the government should pay for health care and education, but others believe it is not the government's responsibility. Discuss both views and give your opinion.

Dè 7

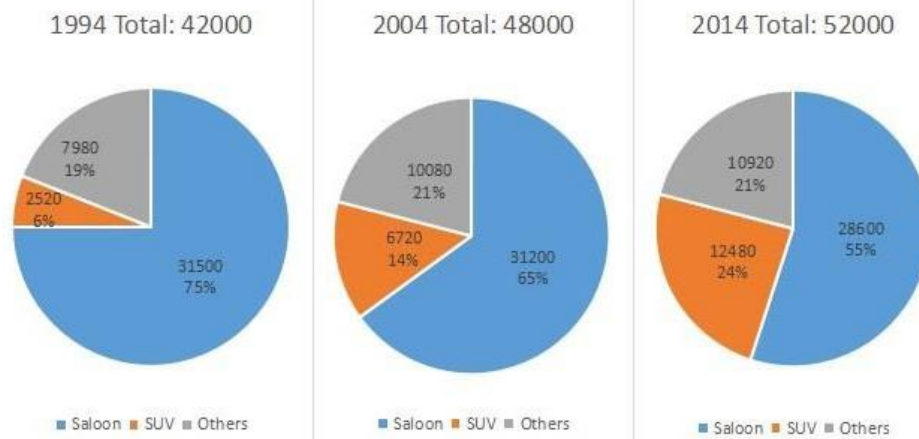
The graph and the chart below show the number of students choosing different kind of courses in a particular university in 2012



Task 2: Employers should give its staff at least four weeks of holidays a year to make employees better at their jobs. To what extent do you agree or disagree ?

Dè 8

The charts below show the number and percentage of the sales of new cars in Australia in April in 1994, 2004 and 2014.



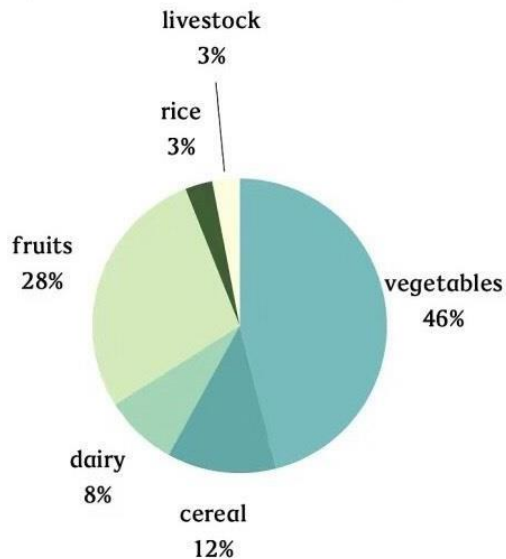
Task 2 : Some people think that history has little or nothing meaning, while others think that history can help understand present. Discuss both views and give your own opinion.

Đề 9

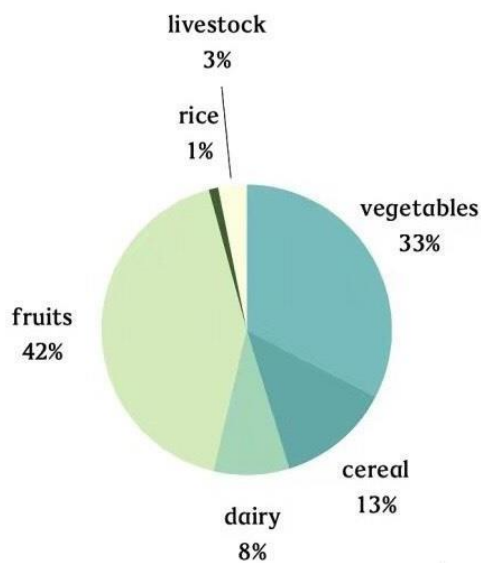
The
IELTS
TRANG
NGUYỄN

The pie charts show the use of water in agriculture in 2004 and the value of product in Australia at the same year.

The percentage of water used for six products in 2004



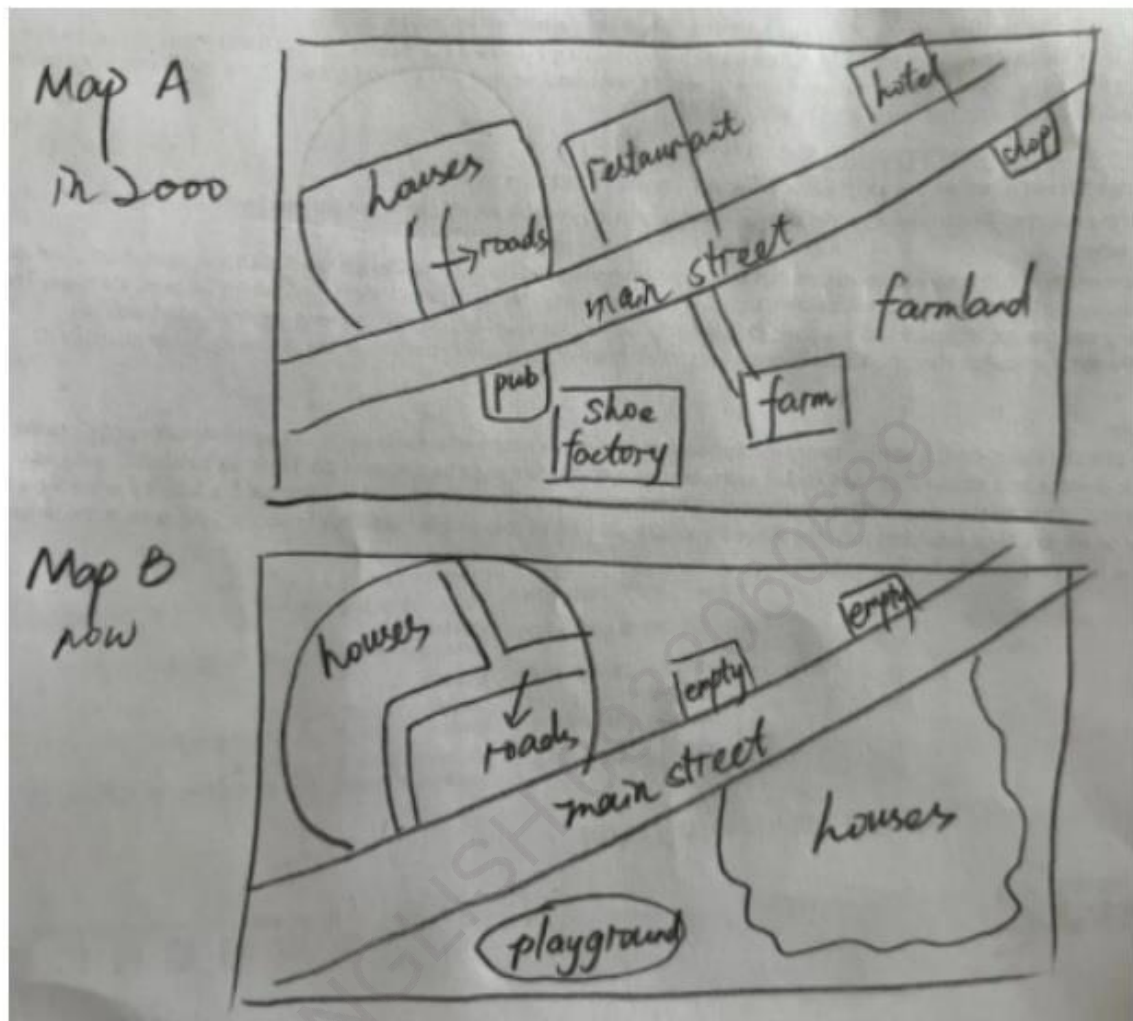
The percentage of total income from products in 2004



Task 2 : Some people say it is great for older schoolchildren to study a large number of subjects and develop their knowledge, others think it is great to study a smallest subjects in greater. Discuss both views and give your opinion

Dè 10

Shown in the two maps are the original layout of a British village and how it looks like at present.



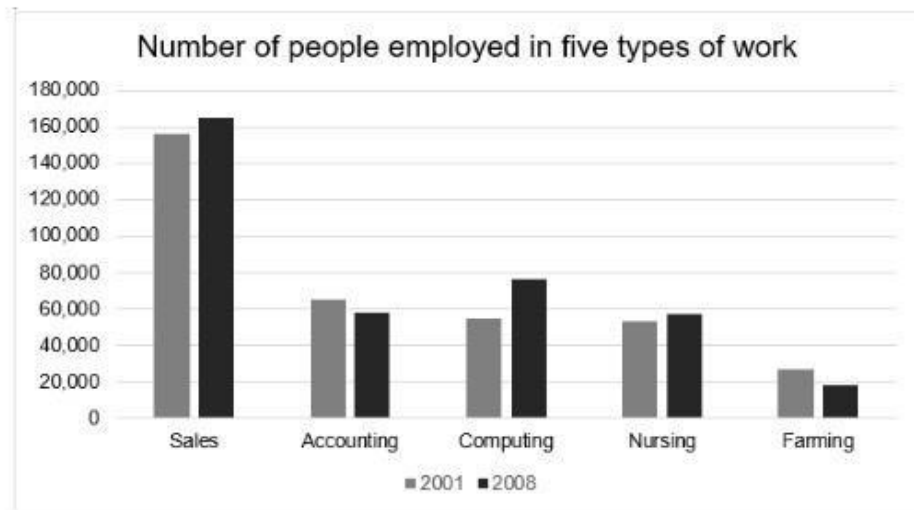
Task 2: Some people think watching television is bad for children in every way. Others think it is good for children to get knowledge. Discuss both views and give your own opinion

Đề 11

The chart below shows the number of people employed in five types of work in one region of Australia in 2001 and 2008.

Summarise the information by selecting and reporting the main features, and make comparisons where relevant.

Write at least 150 words.



Task 2 : Despite better access to education, many adults today are still cannot read or write. In what ways are they disadvantaged? What can governments do to help them?

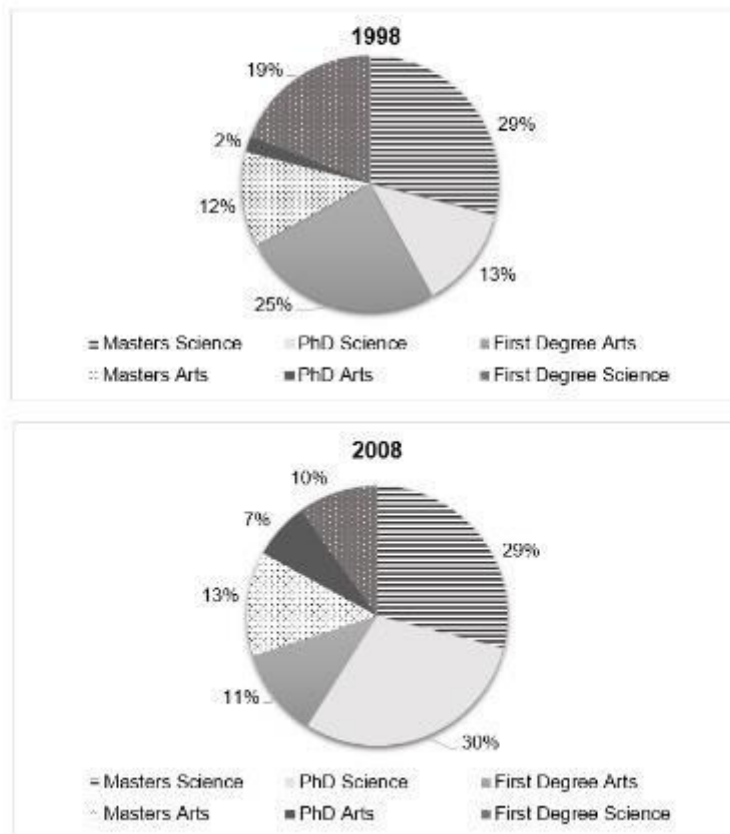
Đề 12

TRANG
NGUYEN

The chart below shows the qualification of graduates at an engineering company in 1998 and 2008.

Summarize the information by selecting and reporting the main features, and make comparisons where relevant

Write at least 150 words.

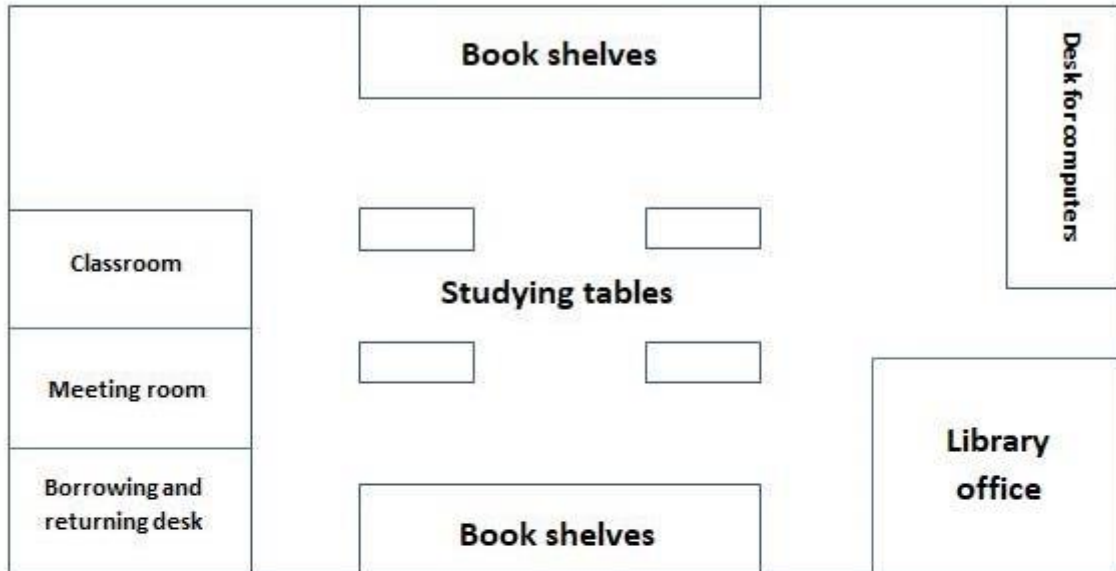


Task 2 :Some people think hosting major international sporting events brings a lot of advantages to a country, while others believe there are more disadvantages. Discuss both views and give your own opinion.

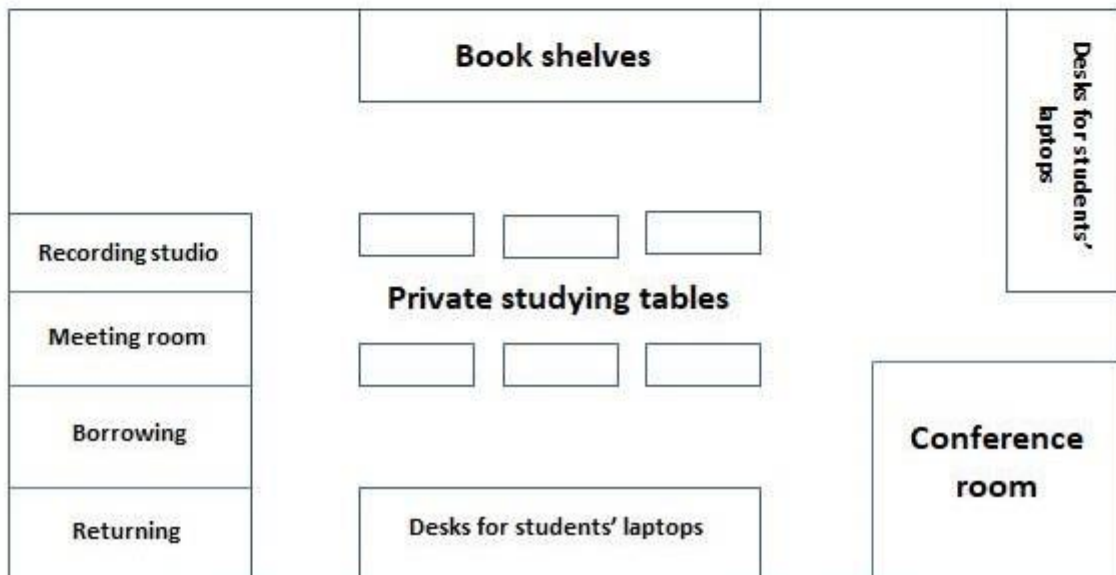
ĐỀ 13

The plans show a school library 5 years ago and the same library now.

5 YEARS AGO



CURRENT PLAN



Task 2: Some people think paying taxes is a big enough contribution to their society, while others think people have more responsibilities as members of society than only paying taxes. Discuss both views and give your opinion.

Đề 14 (ra rồi bỏ) (09-05-2024)

WRITING TASK 1

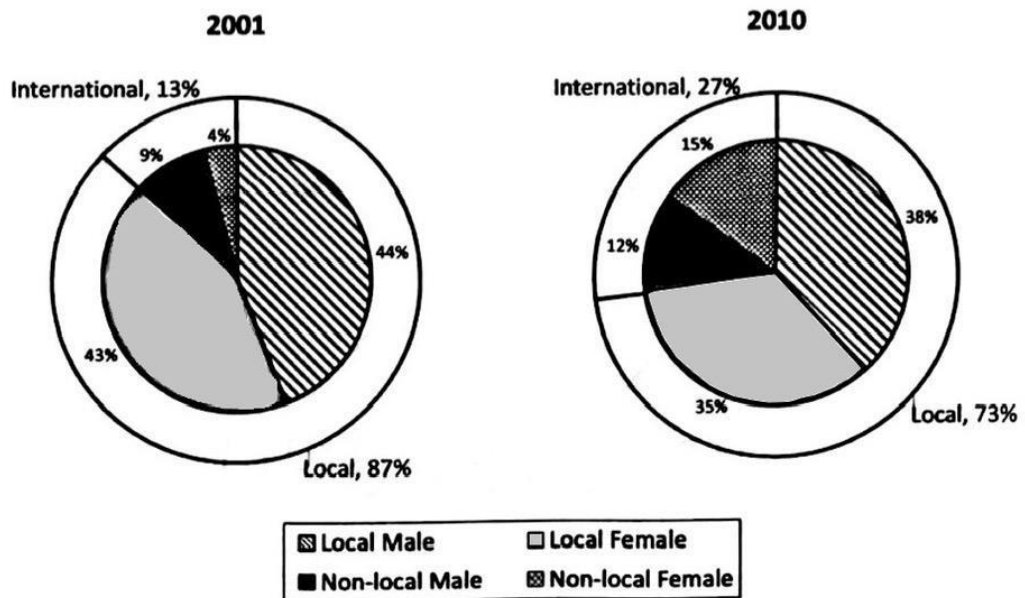
You should spend about 20 minutes on this task.

The table and pie charts below show the number of research students in Australian universities in 2001 and 2010.

Summarise the information by selecting and reporting the main features, and make comparison where relevant.

Write at least 150 words.

	Local research students	International research students	Total
2001	33,657	5,192	38,849
2010	39,488	14,593	54,081



Task 2: Nowadays, most countries improve the standard of living through economic development. But some social values are lost as a result. Do you think the advantages of the phenomenon outweigh the disadvantages?

Đề 15

The table below shows the number of immigrants from five different countries to these five countries in 2002.

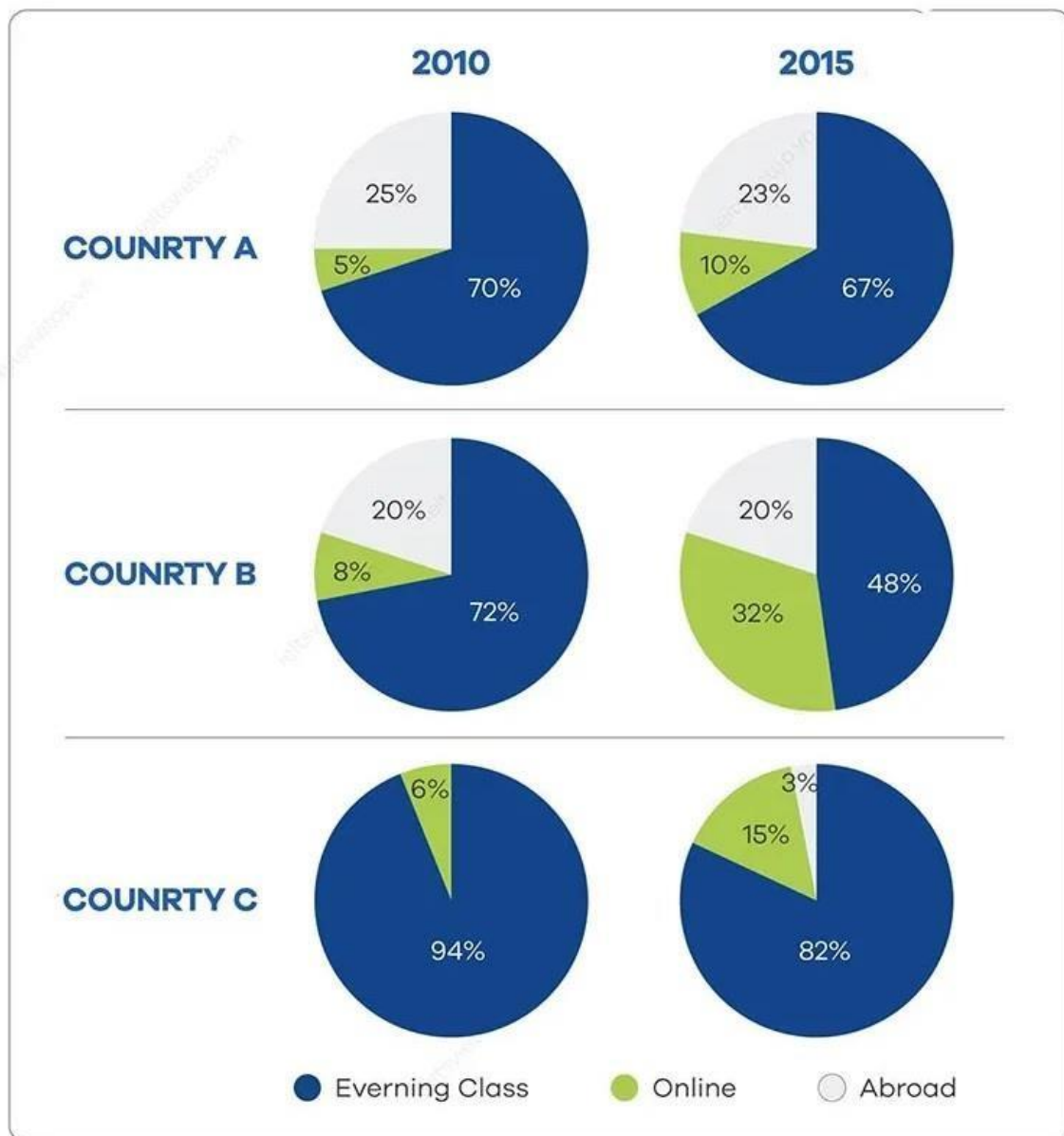
	From UK	From Germany	From Poland	From Italy	From Spain
To UK	NULL	2.3	8.9	4.5	5.5
To Germany	0.8	NULL	7.7	3.5	4.4
To Poland	0.1	0.2	NULL	0.5	0.2
To Italy	0.4	0.5	2.3	NULL	0.1
To Spain	0.5	0.7	2.6	1.2	NULL

Task 2 : Some people think that governments should give financial support to creative artists such as painters and musicians. Others believe that this kind support is waste of money. Discuss both views and give your own opinion.

Đề 16



The charts below show the differences in how people in 3 countries learned English in 2010 and 2015.



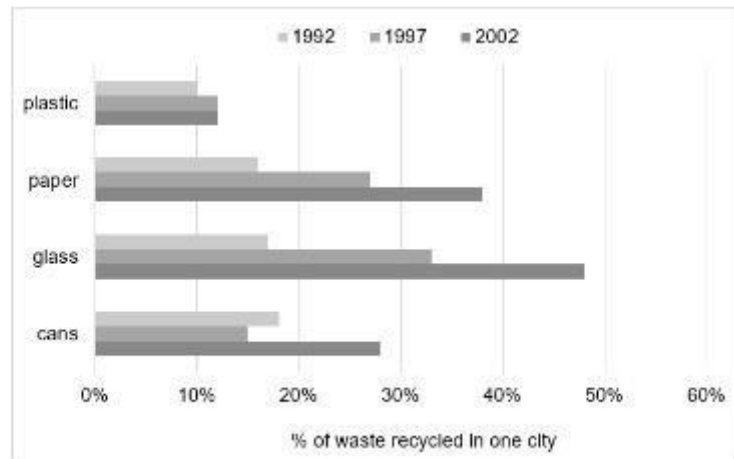
Task 2: Nowadays celebrities are more known for their glamour and wealth than for their achievement, and this sets a bad example to young people. To what extent do you agree or disagree?

ĐỀ 17

The chart below shows the percentage of different types of household waste that were recycled in one city between 1992 and 2002.

Summarize the information by selecting and reporting the main features, and make comparisons where relevant

Write at least 150 words.



Task 2: Countries with a long average working time are more economically successful, but they are also likely to suffer from negative social consequences. To what extent do you agree or disagree?

ĐỀ 18

The graph below shows the percentage of *adults* in urban and rural areas who *took part in four free time activities* in 1990 and 2010.

Summarise the information by selecting and reporting the main features, and make comparisons where relevant.

	1990		2000	
	Urban	Rural	Urban	Rural
Reading	61	71	78	78
Animated play	10	18	10	14
Playing	21	26	14	26
Photography	7	14	17	26

Task 2 : Some professionals, such as teachers and doctors make a greater contribution to society so they should be paid more than sport athletes and entertainment stars. To what extent do you agree or disagree?

Đề 19

The table below shows the percentage of men and women working in four areas in 1986, 1996 and 2006.

Areas	Men			Women		
	1986	1996	2006	1986	1996	2006
Banking	15%	17%	19%	20%	24%	26%
Manufacturing Industry	34%	26%	18%	24%	20%	17%
Catering	10%	20%	20%	12%	16%	18%
Education	13%	14%	15%	15%	20%	25%

Task 2: Doctors encourage older people to take regular exercise, but there are few of them taking enough physical exercise. What are the causes and what solutions could be taken to solve the problem?

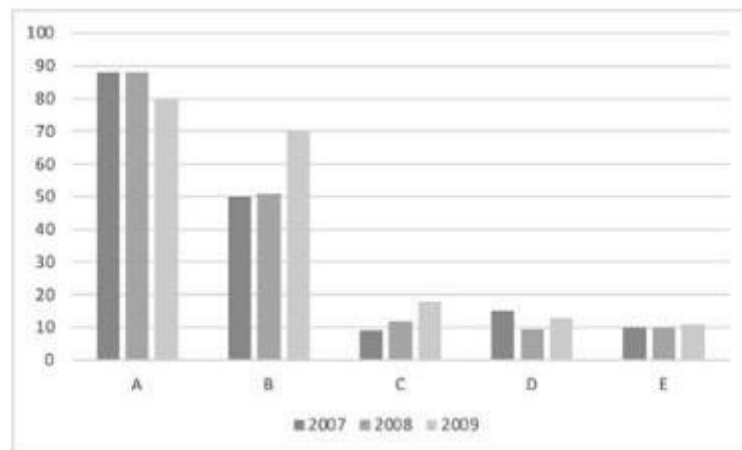
Đề 20

TRANG
NGUYỄN

The chart below shows the number of films (in thousands) produced by five countries in three years.

Summarise the information by selecting and reporting the main features, and make comparisons where relevant.

Write at least 150 words.



Task 2 : Some people think that people should keep all their money and should not have to pay tax to the state. Do you agree or disagree?

Đề 21

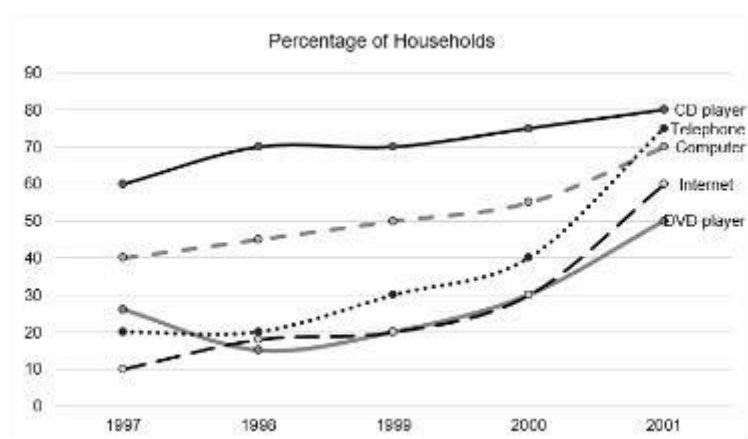
IELTS
TRANG
NGUYỄN

You should spend about 20 minutes on this task.

The graph below shows the percentage of households with different kinds of technology in the UK from 1997 to 2001.

Summarize the information by selecting and reporting the main features, and make comparisons where relevant.

Write at least 150 words.



Task 2: People continue to commit crimes even after being punished for it. Why do you think this happens? How can crime be stopped?

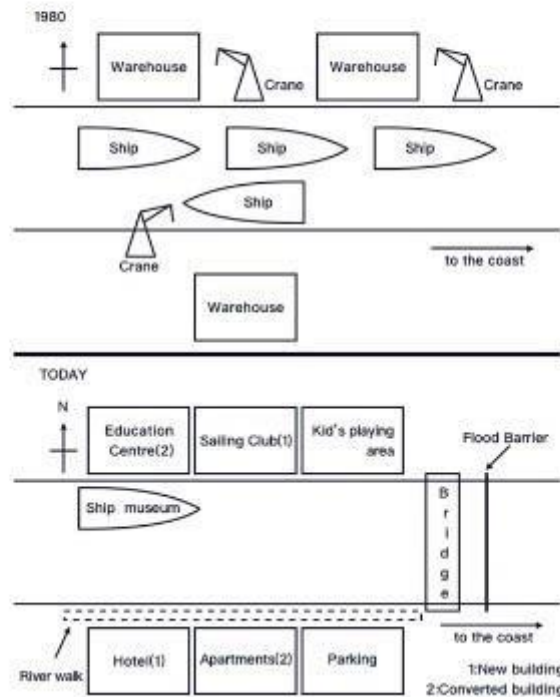
Đề 22

TRANG
NGUYỄN

The diagrams show how Liverton docks changed since 1980.

Summarise the information by selecting and reporting the main features, and make comparisons where relevant.

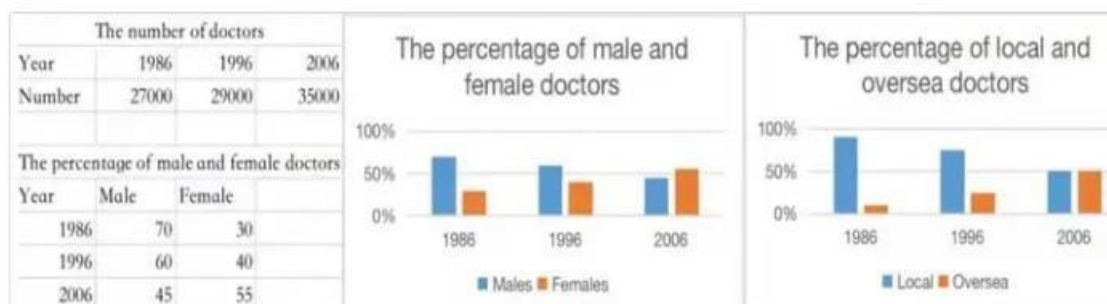
Write at least 150 words.



Task 2: Some people think that secondary school students should study international news as one of their subjects; but others believe that it is a waste of their valuable study time. Discuss both views and give your opinion.

Đề 23

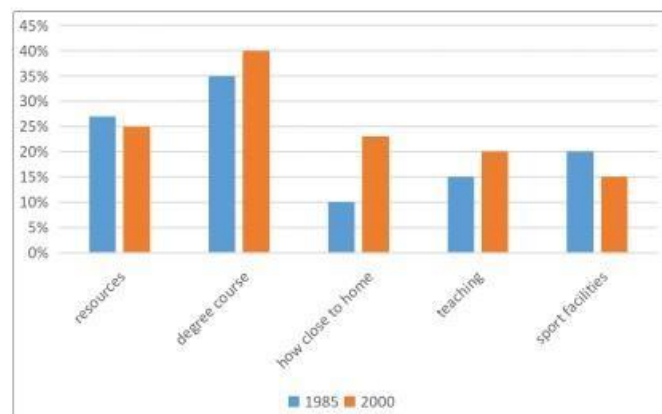
The table and charts below show the number of doctors and percentages of different groups of doctors in Australia from 1986 to 2006.



With the rapid development of communication technology such as smart phones tablets and other mobile devices, some people think that the disadvantages outweigh its advantages. To what extent do you agree or disagree?

Đề 24

The chart shows the reasons why UK students choose one university between 1985 and 2000.



If people go to live in another country, they should follow the local customs and traditions. To what extent do you agree or disagree?

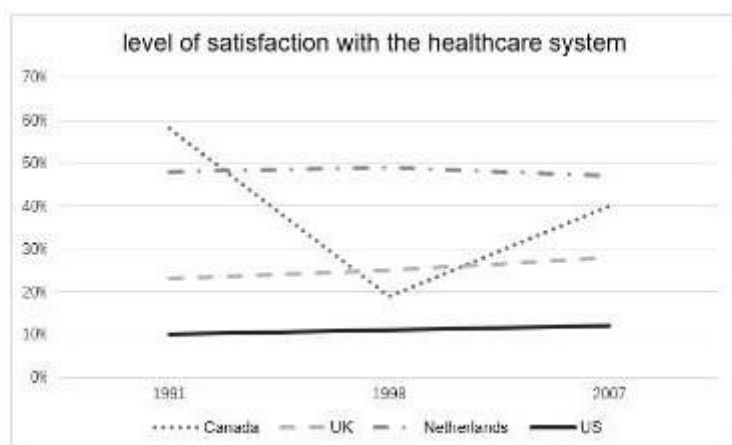
Đề 25

TRANG
NGUYỄN

The graph below shows people's level of satisfaction with the health care system in 4 countries between 1991 and 2007

Summarise the information by selecting and reporting the main features, and make comparisons where relevant.

Write at least 150 words.



Many people aim to achieve the balance between their work and life, but few people achieve it. What are the causes of the problems? How to overcome it?

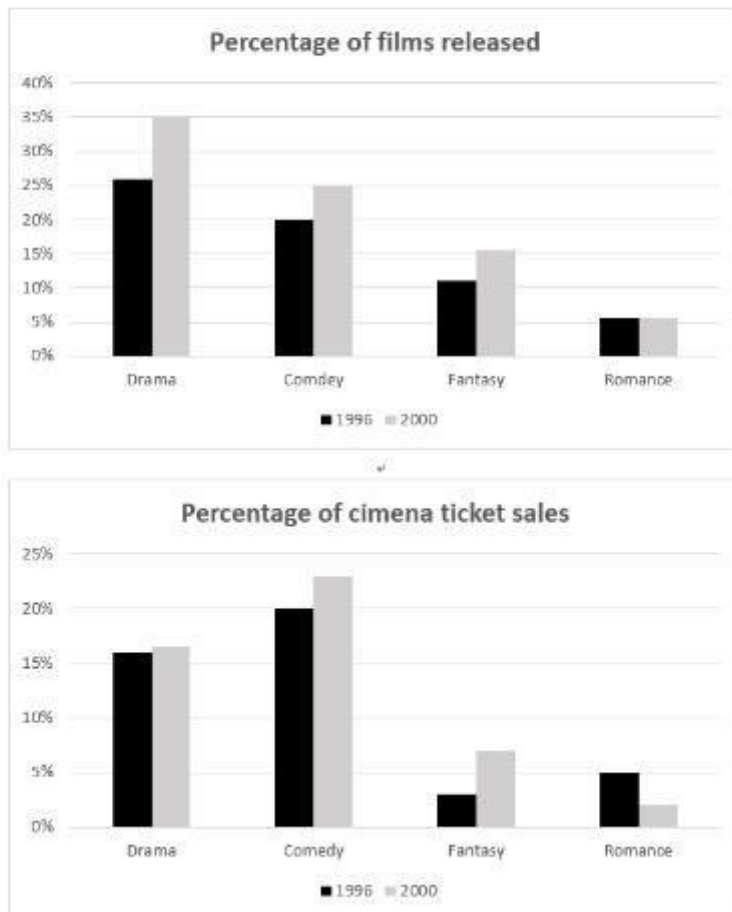
ĐỀ 26

TRANG
NGUYỄN

The charts below show the total percentage of films released and the total percentage of ticket sales in 1996 and 2006 in a country.

Summarise the information by selecting and reporting the main features, and make comparisons where relevant.

Write at least 150 words.



Task 2 : Some people think that the age limit for driving should be increased in order to make driving safer. To what extent do you agree or disagree?

Đề 27 (ra rồi bỏ) (18-05-2024)

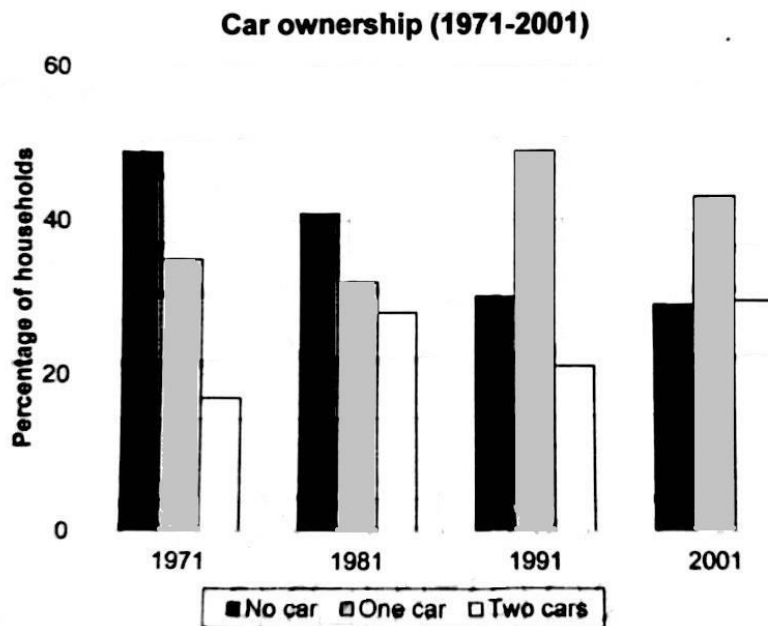
WRITING TASK 1

You should spend around 20 minutes on this task.

The chart below shows the changes in the percentage of households with cars in one European country between 1971 and 2001.*

Summarise the information by selecting and reporting the main features, and make comparison where relevant.

Write at least 150 words.



In many different countries, most shops and products become the same. Some people think it is a positive development, while others think it is a negative development. Discuss both views and give your own opinion.

Đề 28

The table below shows the percentage of adults in seven Australian cities taking public transport when going to work or study in 1996 and 2006

The table also shows the change in that period

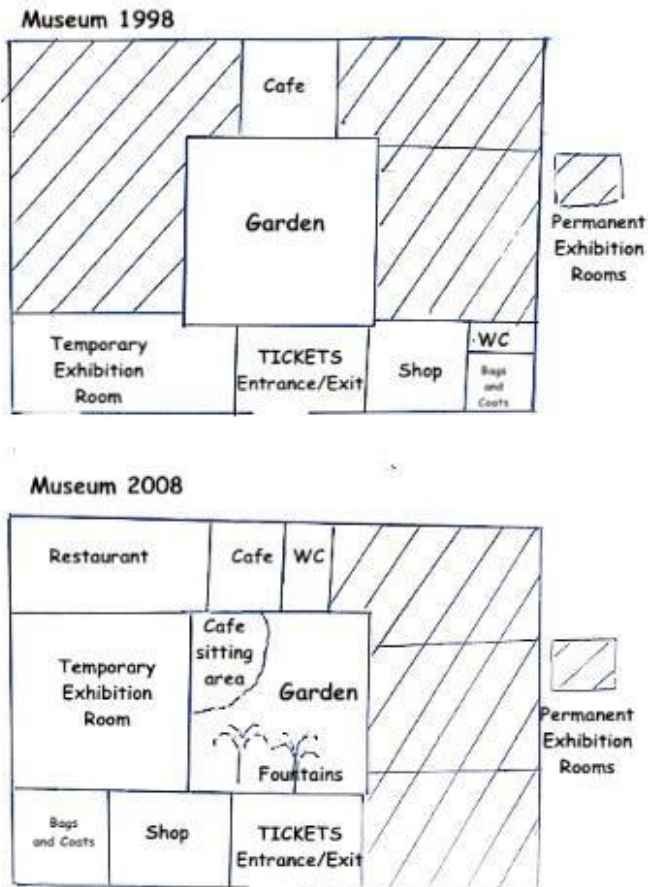
Cities	% in 1996	% in 2006	% in change from 1996 to 2006
Sydney	23	26	13
Adelaide	14	17	21
Brisbane	12	16	33
Melbourne	11	12	9
Perth	13	15	16
Hobart	11	9	-18
Canberra	12	8	-33

In many countries, there is no enough recycling of waste materials (such as. paper, glass, cans). What are the reasons and solutions?

Đề 29



- Task 1: The picture below shows the plant of a museum in 1998 and after some changes were made in 2008.

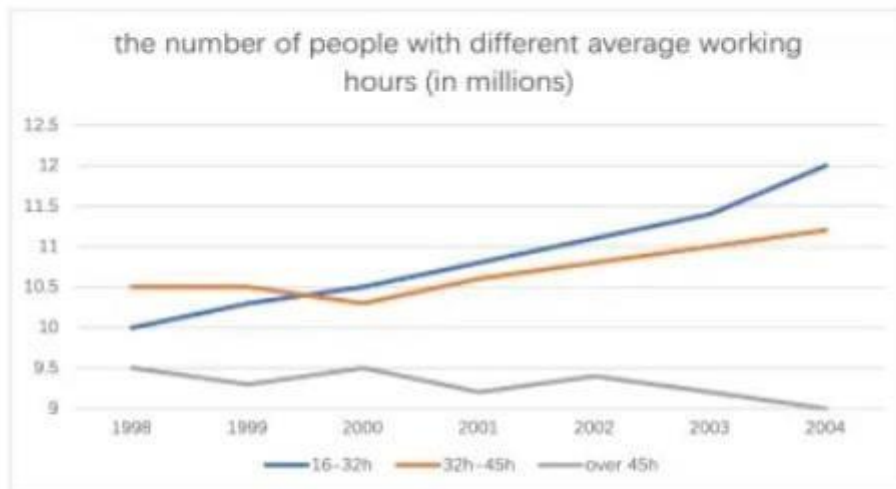


Young people who commit serious crimes, such as a robbery or a violent attack should be punished in the same way as adults. To what extent do you agree or disagree?

Đề 30

TRANG
NGUYỄN

The line chart depicts variations in the overall count of individuals based on their average working hours, while the accompanying table illustrates the year-on-year fluctuations in the count of paid holidays spanning the period from 1998 to 2004.



The average number of paid holidays by year

Year	days
1998	25
1999	27
2000	29
2001	30
2002	30
2003	32
2004	32

Some people think more public money should be spent on roads and motorways than the public transport system. To what extent do you agree or disagree?

Đề 31

T. Đ. A. N. G.
N. G. U. Y. Ê. N.

You should spend about 20 minutes on this task.

The table gives information about the number of international tourist arrivals in eight countries in 2009 and 2010.

Summarize the information by selecting and reporting the main features, and make comparisons where relevant.

Write at least 150 words.

Country	2009 (millions)	2010 (millions)	Change
France	76	76	+0%
US	66	67	+1.5%
Spain	55	56	+1.8%
UK	55	57	+3.6%
Italy	44	45	+2.3%
Turkey	33	45	+33%
China	22	34	+55%
Germany	11	23	+109%

Task 2: Some people think that as housing is a basic need for people, governments should provide free housing for everyone who can't afford it. To what extent do you agree or disagree?

Đề 32

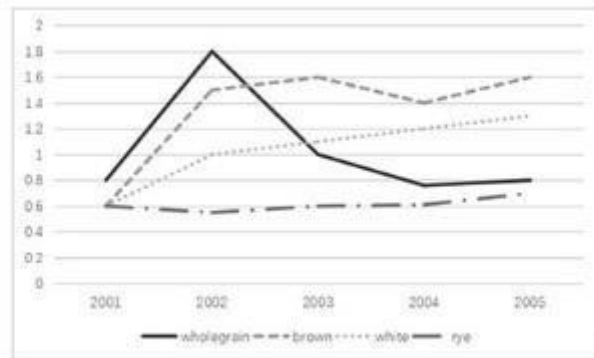
TRANG
NGUYEN

You should spend about 20 minutes on this task.

The chart below shows the price in Euros of four types of bread per kilogram in one European country from 2001 to 2005.

Summarise the information by selecting and reporting the main features, and make comparisons where relevant.

Write at least 150 words.

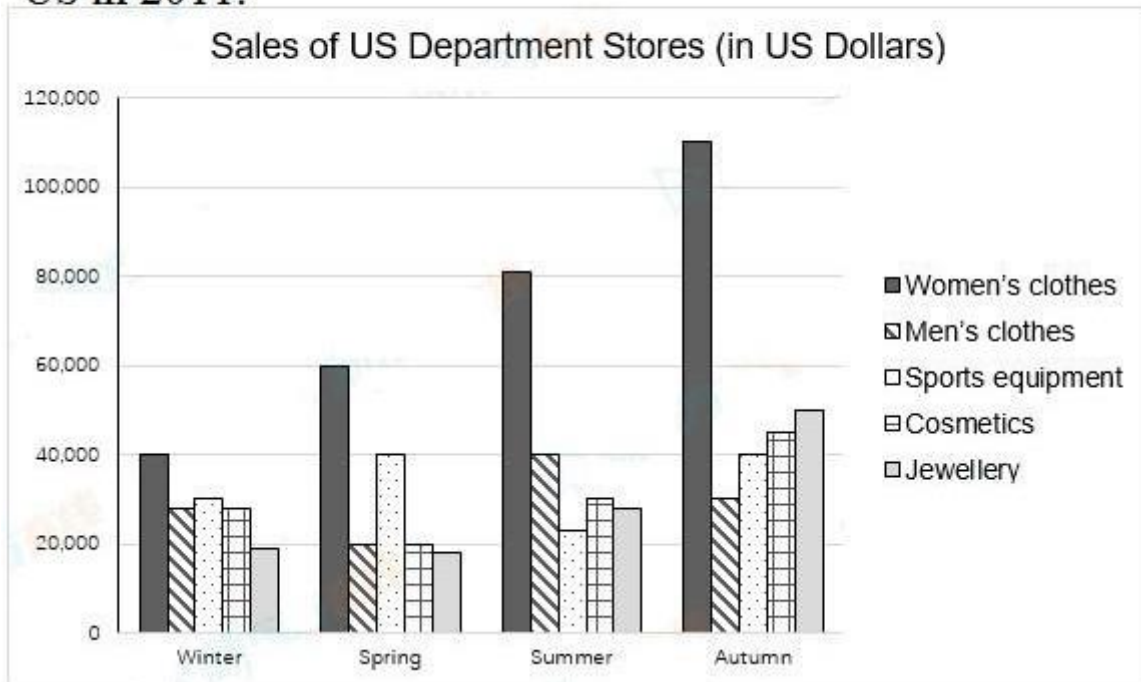


Some people say that the purpose of education is to prepare individuals to be useful to society. Others say its purpose is to prepare individuals to achieve personal ambitions. Discuss both views and give your opinion.

Đề 33

TRANG
NGUYỄN

The graph below shows the sales of five types of items in four different seasons at a departmental store in the US in 2011.

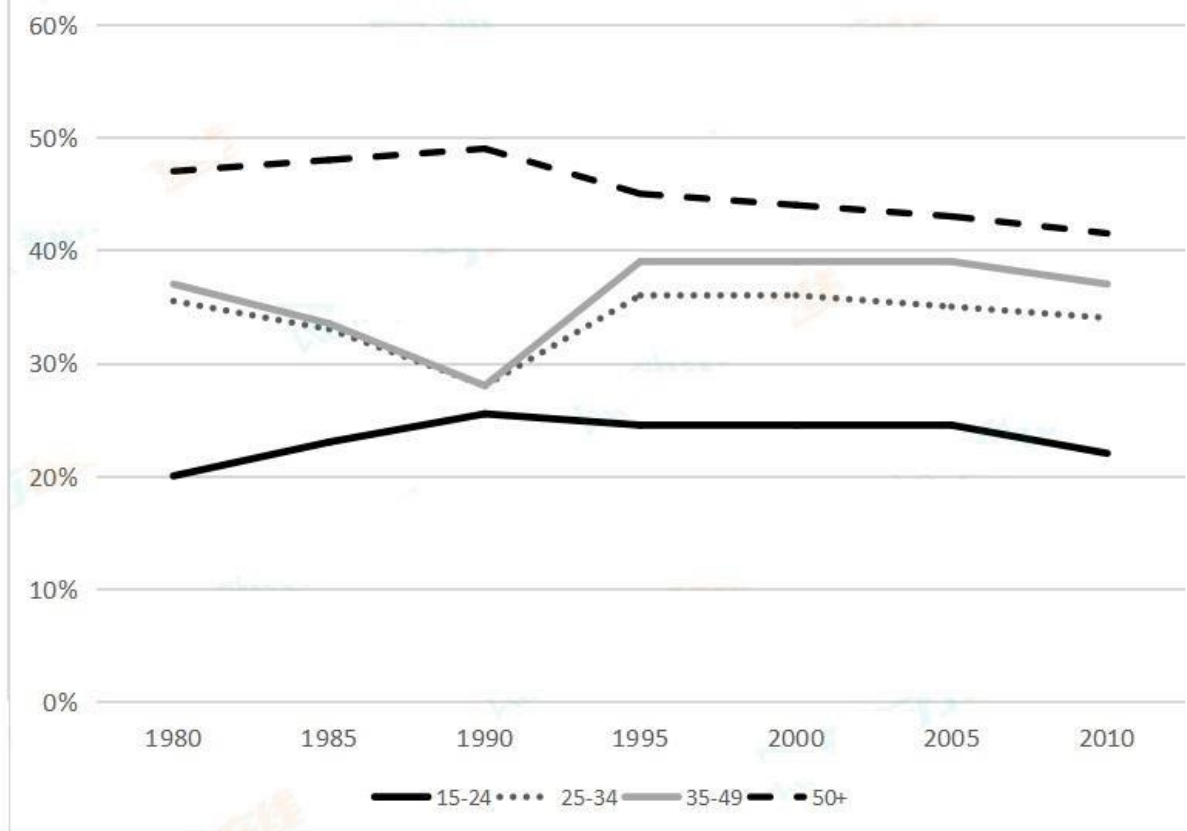


Task 2: It has been suggested that all young adults should be required to undertake a period of unpaid work helping people in the community. Would the drawbacks of such a requirement be greater than the benefits to the community and the individual young adults?

Đề 34

TRANG
NGUYEN

The graph below shows the percentage of people visiting a museum at least once a year between 1980 and 2010.



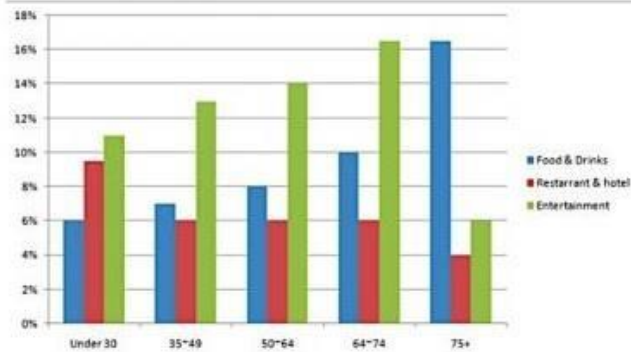
Task 2 : Extreme sports such as skydiving and skiing are very dangerous and should be banned. To what extent do you agree or disagree with this view?

Đề 35

TRANG
NGUYEN

The chart shows the expenditure in three categories as the proportion of the total spending by UK citizens in 2004 according to their age.

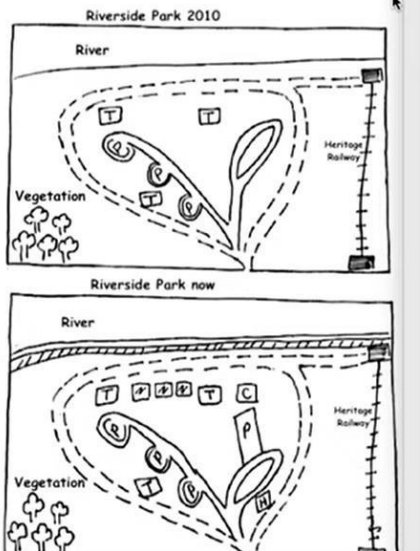
This bar chart below shows the UK citizens' expenditure by age group in 2004



Task 2: Some people think that the use of mobiles (cell) phones should be banned in public places such as in libraries, shops and on public transport. To what extent do you agree or disagree with this statement?

ĐỀ 36

The maps show the Riverside Park in 2010 and Riverside Park now. Provide the information by selecting and reporting the main features where relevant.



The maps illustrate the developments that have taken place in Riverside Park since 2010.

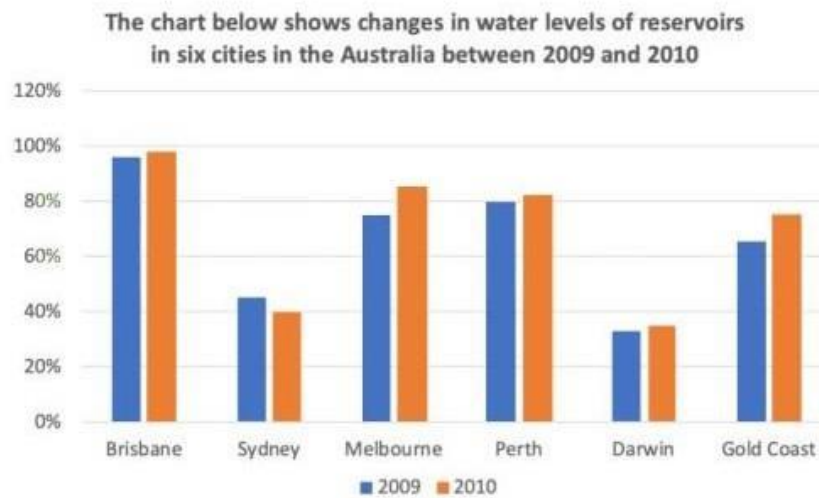
Overall, it can be seen that the park underwent many changes with the principal change being the addition of swings and some new facilities.

In 2010 park had a triangular shape with its base towards the north. The boundary was denoted by a walking path on all the three sides. It was enclosed by north-south railway track, Heritage Railway on the east, some vegetation on the south-west and a river flowing from east to west on the north. The railway track connected two stations, one in the north east corner and one in the south east corner. The station in the north was along connected to the park by a walking path. There was a road originating from the south which led to three different parking areas inside. Finally, there were three toilets located inside the park.

Task 2 : Scientific research should be carried out and controlled by governments rather than private companies. To what extent do you agree or disagree?

ĐỀ 37

The chart below shows the water levels in reservations in six cities in Australia in October 2009 and October 2010.



Task 2: Some people think that printed books are no longer needed in a digital era as all writing can be stored electronically. Others think that printed books will still play an important role. Discuss both views and give your own opinion.

Đề 38

I E L T S

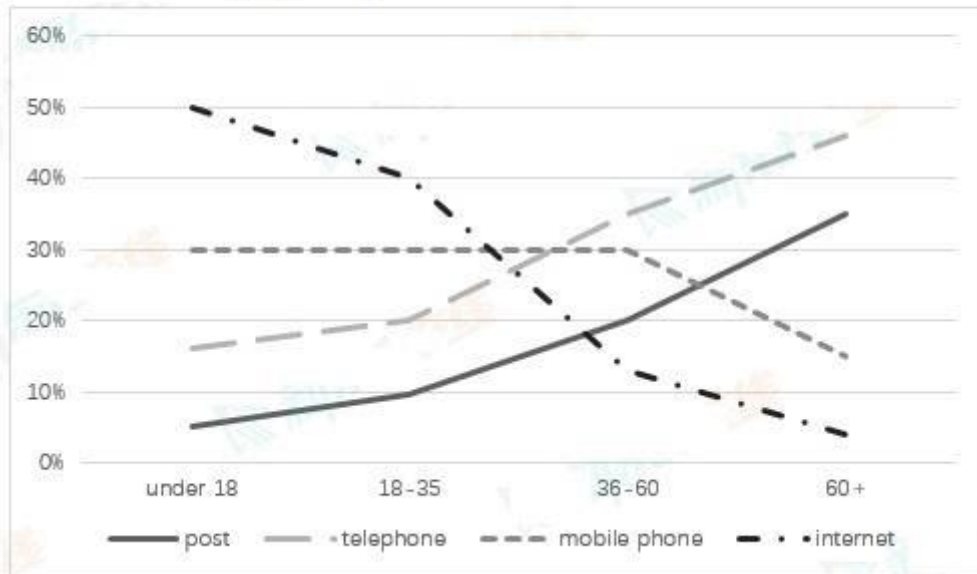
The table below shows information about age, average income per person and population below the poverty line in three states in the USA

Particulars	California	Utah	Florida
Aged under 18	17%	28%	16%
Aged over 60	13%	8%	23%
The average income per person (\$)	23000	17000	22000
Population below poverty line	16%	9%	12%

Task 2: In many countries, people now wear western-style dresses such as suits and jeans rather than traditional clothing. Why is this? Is this a positive or negative development?

Đề 39

The graph below shows the changes of four types of ways to communicate according to different age groups in the UK in 2011.



Some people think that all lawbreakers should be sent to prison, while others think that there are better alternatives for those whose crimes are minor, such as making them do work for the local community. Discuss both views and give your own opinion.

Đề 40

TRANG
NGUYỄN

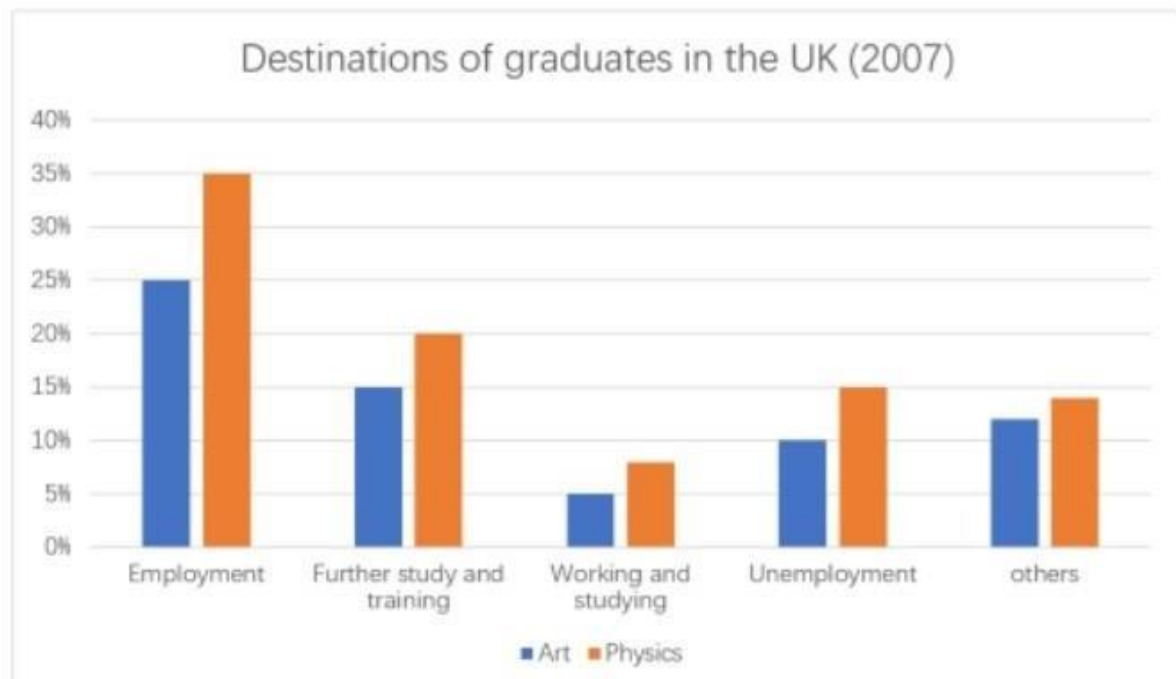
The first chart shows the average housing prices in two cities in one country in 2010 and 2015, with projections for 2025. The second chart shows the percentage of people aged 30-35 who owned a home in 2010 and 2015.



Many people feel that most of the urgent problems can only be solved by international cooperation. To what extent do you agree or disagree?

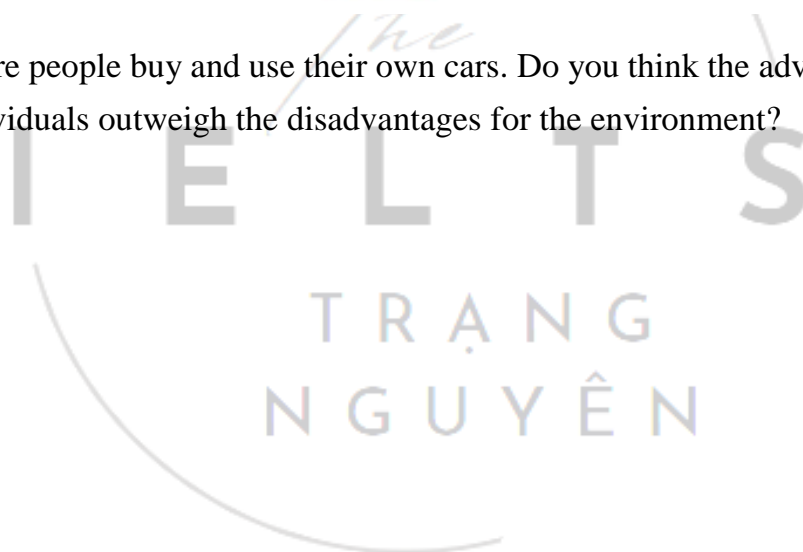
Đề 41

The chart below shows the destinations of students graduating from Physics and Art in the UK in 2007.

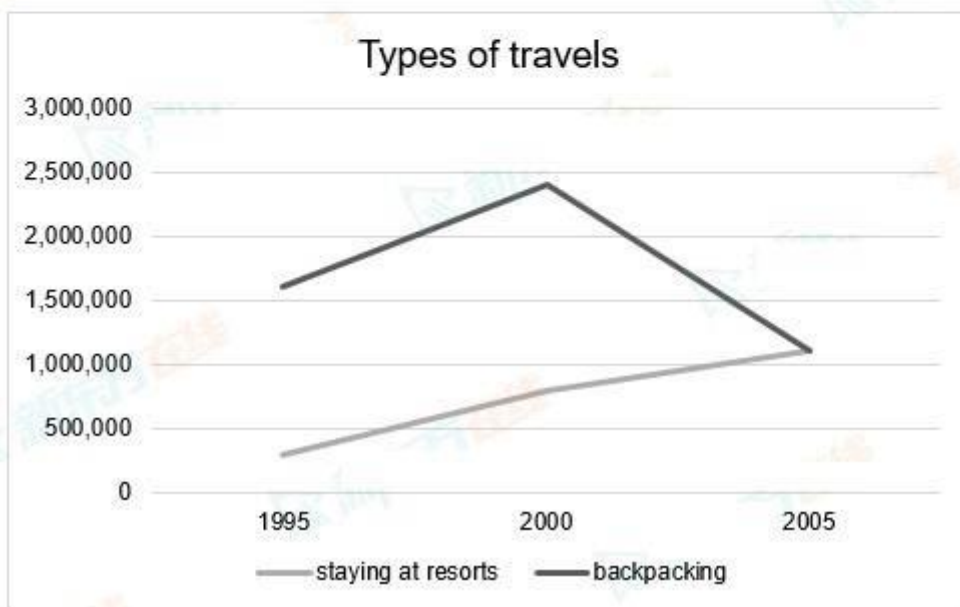
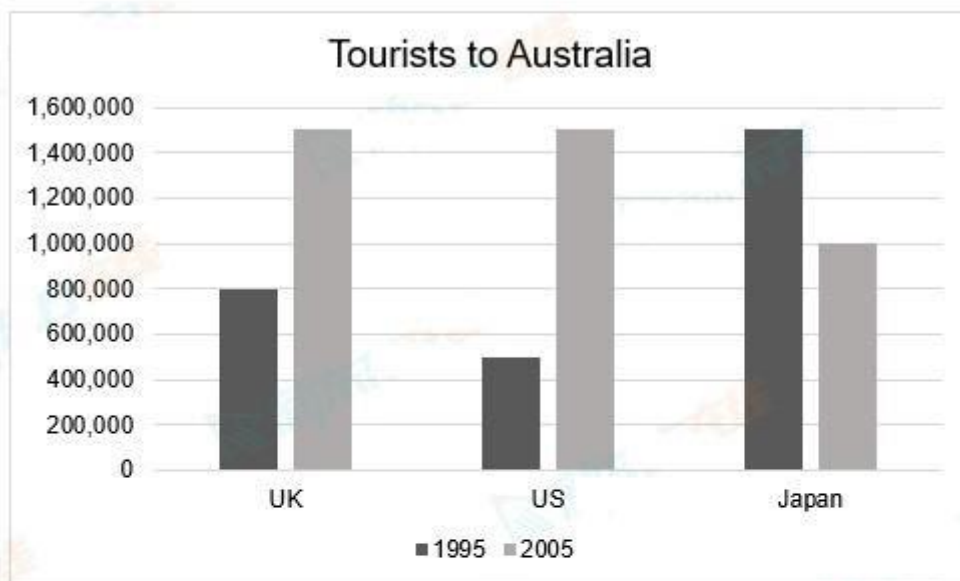


More and more people buy and use their own cars. Do you think the advantages of this trend for individuals outweigh the disadvantages for the environment?

Đề 42



The charts below show the number of tourists to Australia from three countries in 1995 and 2005, and the types of travels between 1995 and 2005.



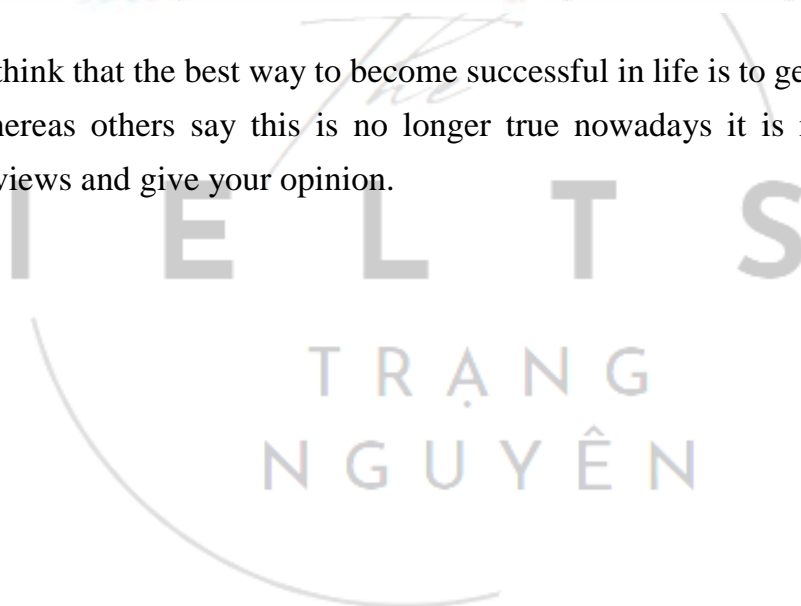
Directors and managers of organisations are often older people. Some people say that it is better for younger people to be leaders. To what extent do you agree or disagree?

The table below shows the household composition in a North American country from 1970 and 2003.

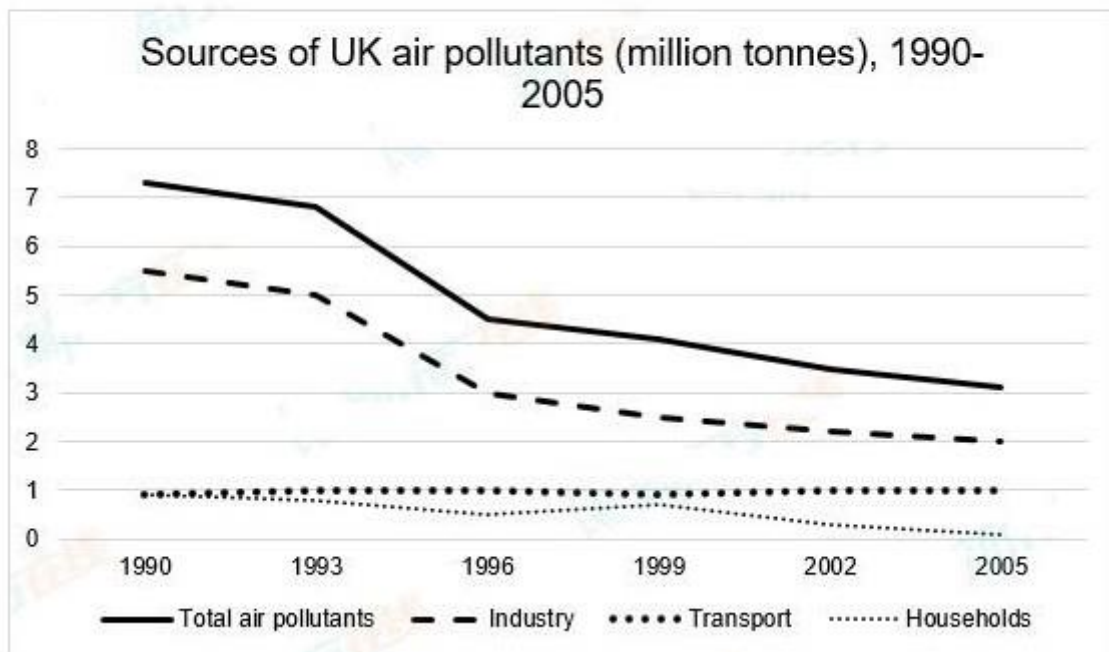
Household Composition in a North American Country			
Household Composition	Type of Household	1970	2003
Family Household	Married Couple	61%	41%
	Father + Kid	9%	10%
	Mother + Kid	10%	11%
	Other Member Sharing	13%	14%
Non-Family Household	Single	4%	13%
	Room Sharing	3%	11%

Some people think that the best way to become successful in life is to get the university education, whereas others say this is no longer true nowadays it is no longer true. Discuss both views and give your opinion.

Đề 44



The graph below shows different sources of air pollutants in the UK from 1990 to 2005.



Ambition is a positive quality for people to have in many societies today. How important is it for people who want to succeed in life? Is it a positive or negative characteristic?

IELTS
TRANG
NGUYEN